

Name _____

Date _____

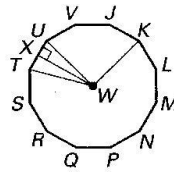
LESSON 11.6 Practice B
For use with pages 762–769

Find the measure of a central angle of a regular polygon with the given number of sides. Round answers to the nearest tenth of a degree, if necessary.

1. 20 sides 2. 36 sides 3. 120 sides 4. 23 sides

Find the given angle measure for the regular dodecagon shown.

5. $m\angle TWU$ 6. $m\angle TWX$
7. $m\angle XUW$ 8. $m\angle TWK$
9. $m\angle UWK$ 10. $m\angle XWK$



11. **Multiple Choice** Which expression gives the apothem for a regular nonagon with side length 10.5?

- A. $a = \frac{5.25}{\tan 40^\circ}$ B. $a = \frac{10.5}{\tan 20^\circ}$
C. $a = \frac{5.25}{\tan 20^\circ}$ D. $a = 5.25 \cdot \tan 20^\circ$

12. A regular hexagon has a diameter 22 inches. What is the length of its apothem? Round your answer to the nearest tenth.
13. A regular octagon has a diameter 8.5 feet. What is the length of its apothem? Round your answer to the nearest tenth.

Find the perimeter and area of the regular polygon. Round answers to the nearest tenth, if necessary.

14. 15. 16.
17. 18. 19.

20. What is the area of a regular 18-gon with a side length of 8 meters? Round your answer to the nearest tenth, if necessary.

Copyright © by McDougal Littell, a division of Houghton Mifflin Company.

Name _____

Date _____

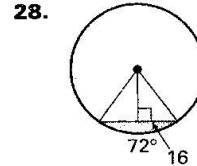
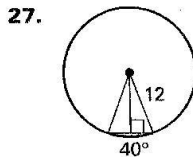
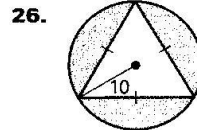
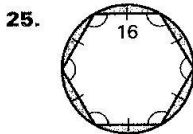
LESSON
11.6

Practice B *continued*

For use with pages 762–769

21. What is the area of a regular 24-gon with a side length of 10 inches? Round your answer to the nearest tenth, if necessary.
22. What is the area of a regular 30-gon with a radius of 20 feet? Round your answer to the nearest tenth, if necessary.
23. Find the area of a regular pentagon inscribed in a circle whose equation is given by $(x - 4)^2 + (y - 6)^2 = 16$.
24. Find the area of a regular octagon inscribed in a circle whose equation is given by $(x - 2)^2 + (y + 3)^2 = 25$.

Find the area of the shaded region. Round answers to the nearest tenth, if necessary.



In Exercises 29 and 30, use the following information.

Tiles You are tiling the floor of a hallway with tiles that are regular hexagons as shown.

29. What is the area of each tile?
30. The hallway has a width of 5 feet and a length of 12 feet. At least how many tiles will you need?
31. A cup saucer is shaped like a regular decagon with a diameter of 5.5 inches as shown.
 - a. What is the length of the apothem of the saucer? Round your answer to the nearest tenth.
 - b. What is the perimeter and area of the saucer? Round your answers to the nearest tenth.

