

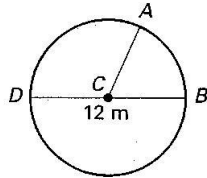
Name _____

Date _____

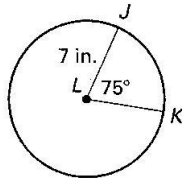
CHAPTER 11 **Quiz 2**
For use after Lessons 11.4–11.5

Find the indicated measure.

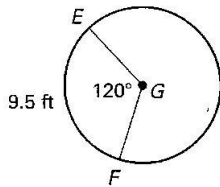
1. Circumference



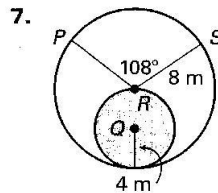
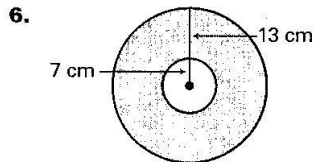
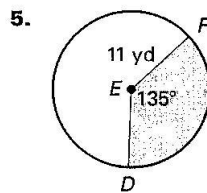
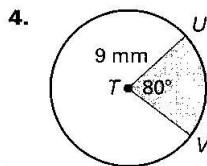
2. Length of \widehat{JK}



3. Radius



Find the area of the shaded region.



Answers

1. _____
2. _____
3. _____
4. _____
5. _____
6. _____
7. _____

Copyright © by McDougal Littell, a division of Houghton Mifflin Company.